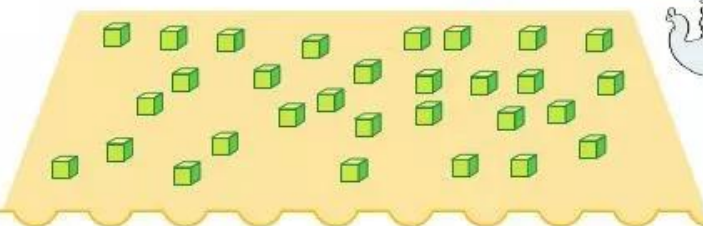

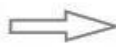
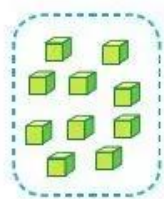


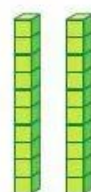
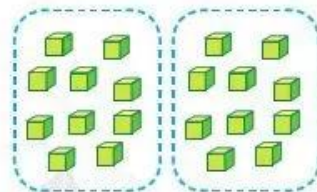
CÁC SỐ 10, 20, 30, 40, 50, 60, 70, 80, 90



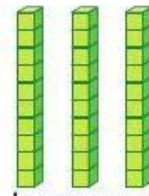

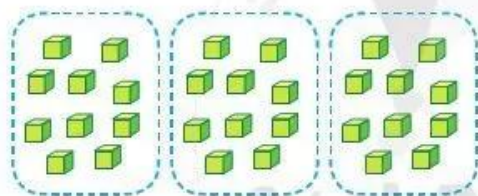
Có bao nhiêu khối lập phương?



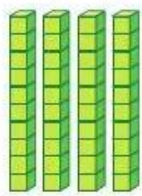
mười
10



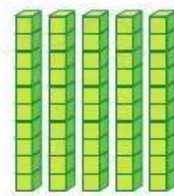
hai mươi
20



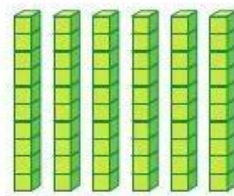
ba mươi
30



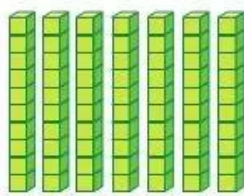
bốn mươi
40




năm mươi
50



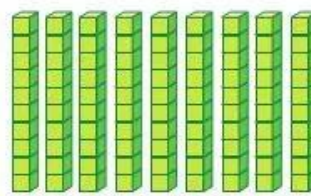
sáu mươi
60



bảy mươi
70



tám mươi
80

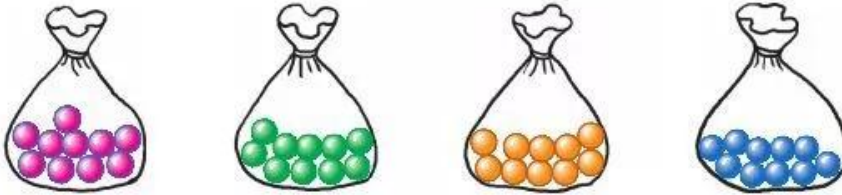


chín mươi
90

1 a) Có tất cả bao nhiêu hạt?



b) Có tất cả bao nhiêu viên kẹo?



2 Số ?



3 Trò chơi “Lấy đồ vật cho đủ số ghi trên thẻ”

Hai mươi viên sỏi

Ba mươi viên sỏi

