

CÁC SỐ 11, 12, 13, 14, 15, 16

Illustration of a girl in a blue apron standing behind a fruit stand. On the stand are a basket of peaches, a tray of pears, a tray of lemons, a basket of grapes, a tray of apples, and a basket of oranges.



Two bar graphs made of green blocks. The first graph has a bar of 10 blocks and a bar of 3 blocks, labeled "mười ba" and "13". The second graph has a bar of 10 blocks and a bar of 6 blocks, labeled "mười sáu" and "16".

1 Số ?

A sequence of seven bar graphs made of green blocks. The first three are labeled 10, 11, and 12. The last four are labeled with question marks.

10	11	12	13	?	?	?
----	----	----	----	---	---	---

2 Số ?





3 Số ?

Cảnh Điều



4 Số ?



5 Xem tranh rồi đếm số bánh mỗi loại:

