


# LÀM QUEN VỚI PHÉP TRỪ - DẤU TRỪ




Dấu trừ



$$5 - 2 = 3$$


Năm trừ hai bằng ba



1 Số ?

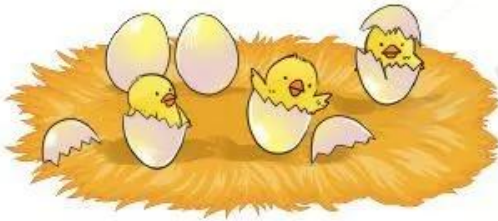


$$3 - 1 = \boxed{?}$$



$$4 - 2 = \boxed{?}$$

2 Chọn phép tính thích hợp với mỗi tranh vẽ:



$$5 - 1$$

$$5 - 3$$




3 Nêu phép tính thích hợp với mỗi tranh vẽ:

a)



$$\boxed{4} \text{ ( ? ) } \boxed{1} = \boxed{?}$$

b)



$$\boxed{6} \text{ ( ? ) } \boxed{1} = \boxed{?}$$