

# PHÉP TRỪ DẠNG 17 - 2

$$17 - 2 = ?$$



$$17 - 2 = 15$$

1 Tính:



$$14 - 2 = \boxed{?}$$



$$16 - 4 = \boxed{?}$$



$$18 - 3 = \boxed{?}$$

2 Tính:

$$15 - 2$$

$$14 - 1$$

$$16 - 5$$

$$18 - 4$$






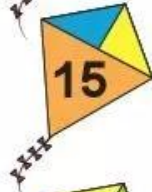


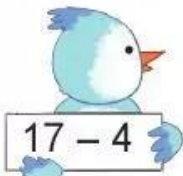
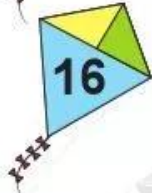


$$16 - 3$$

$$13 - 3$$

$$17 - 6$$

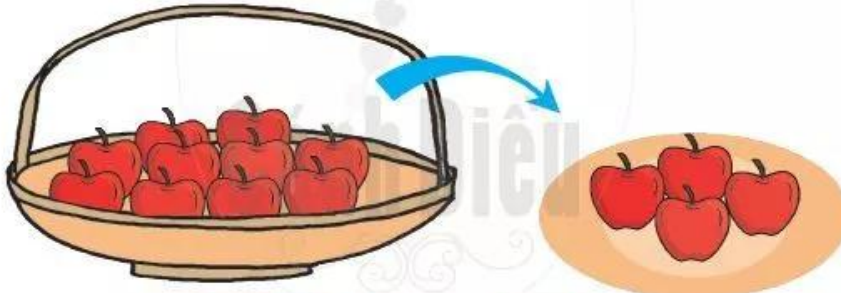
$$19 - 8$$

3 Chọn kết quả đúng với mỗi phép tính:

 $12 - 1$			 $19 - 5$
 $19 - 4$			 $15 - 5$
 $17 - 4$			 $18 - 2$


4 Nêu phép tính thích hợp với mỗi tranh vẽ:

a)



$\boxed{?} - \boxed{?} = \boxed{?}$

b)



$\boxed{?} - \boxed{?} = \boxed{?}$