

# 7 CỘNG VỚI MỘT SỐ

## 6 CỘNG VỚI MỘT SỐ

$7 + 5 = ?$

$6 + 5 = ?$

Gộp cho đủ chục rồi cộng với số còn lại.



$7 + 5$



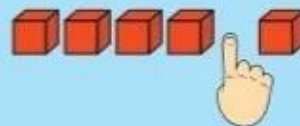
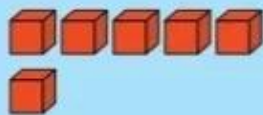
$$\begin{array}{r} 7 + 5 \\ \quad \swarrow \quad \searrow \\ \quad 3 \quad \quad 2 \end{array}$$

$7 + 3 = 10$

$10 + 2 = 12$

$7 + 5 = 12$

$6 + 5$



$$\begin{array}{r} 6 + 5 \\ \quad \swarrow \quad \searrow \\ \quad 4 \quad \quad 1 \end{array}$$

$6 + 4 = 10$

$10 + 1 = 11$

$6 + 5 = 11$

**1** Số?

a)  $7 + 4 = 7 + .?. + 1$

b)  $6 + 5 = 6 + .?. + 1$

$7 + 7 = 7 + .?. + 4$

$6 + 6 = 6 + .?. + 2$

**2** Tính nhẩm.

$7 + 4$

$7 + 5$

$6 + 6$

$7 + 6$

$6 + 5$

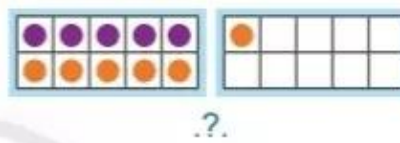
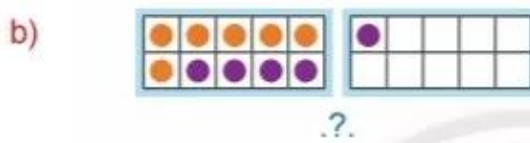
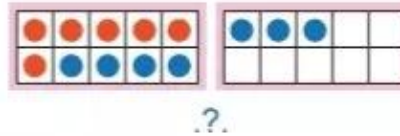
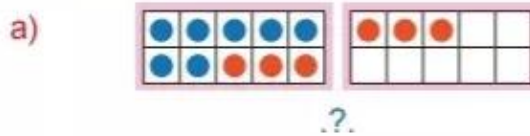
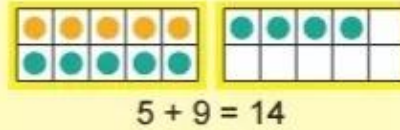
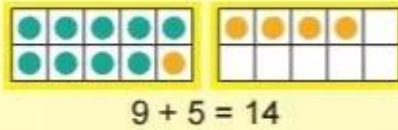
$7 + 7$

**3** Tính để tìm mèo con cho mèo mẹ.



**4** Viết phép tính (theo mẫu).

Mẫu:



**5** Tính nhẩm.

$4 + 9$

$3 + 8$

$8 + 9$

$7 + 8$

$5 + 7$

$6 + 7$

**6**

?

$5 + 7$  ?  $7 + 5$

$5 + 8$  ?  $8 + 3$

$9 + 2$  ?  $3 + 9$

$6 + 8$  ?  $8 + 6$

**7** Hai đĩa nào có tổng số quả chuối là 12?

