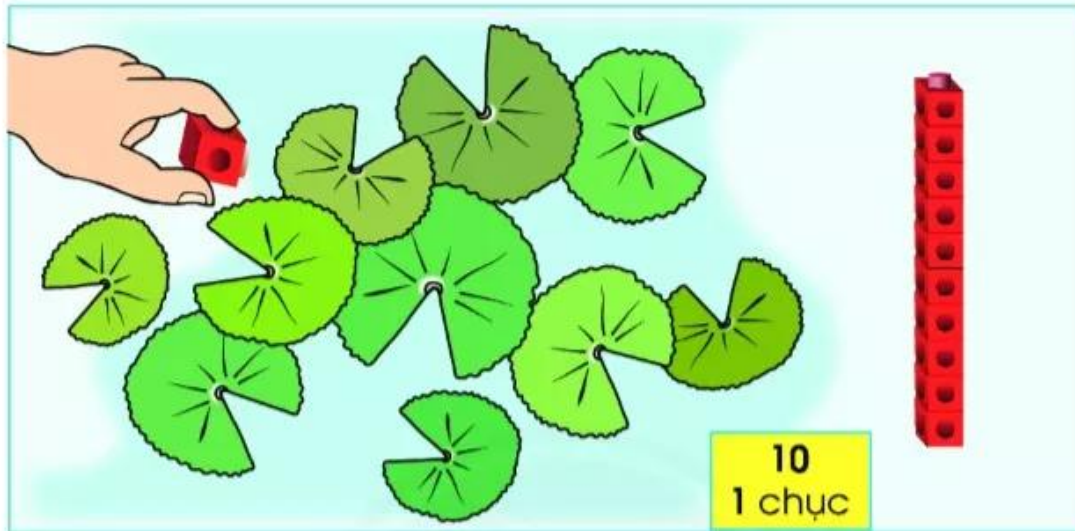


# Chục – Số tròn chục




1 chục <b>10</b> mười					
2 chục <b>20</b> hai mươi		một chục hai chục  mười, hai mươi			
3 chục <b>30</b> ba mươi					
4 chục <b>40</b> bốn mươi		một chục hai chục ... mười chục mười, hai mươi, ..., một trăm			
5 chục <b>50</b> năm mươi	6 chục <b>60</b> sáu mươi	7 chục <b>70</b> bảy mươi	8 chục <b>80</b> tám mươi	9 chục <b>90</b> chín mươi	10 chục <b>100</b> một trăm

1 Số?

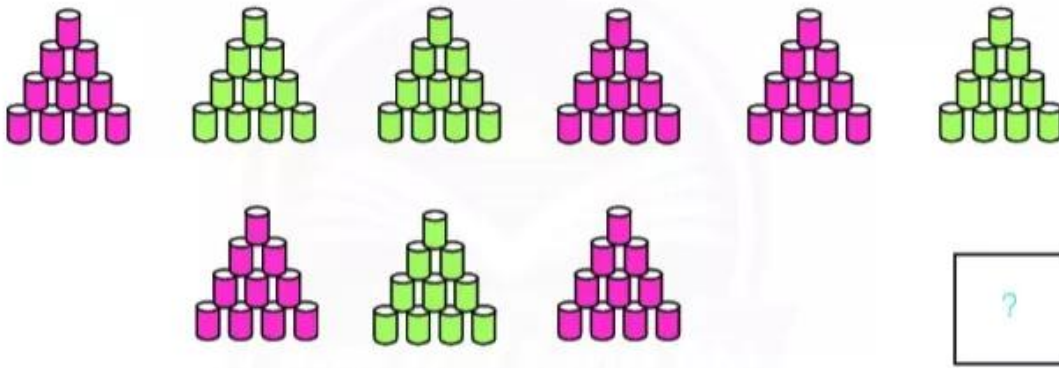
Đếm sao cho nhanh? 

a



7 trays of eggs, each containing 10 eggs. The trays are arranged in two rows: the top row has 5 trays and the bottom row has 2 trays. To the right of the trays is a square box containing a question mark.

b



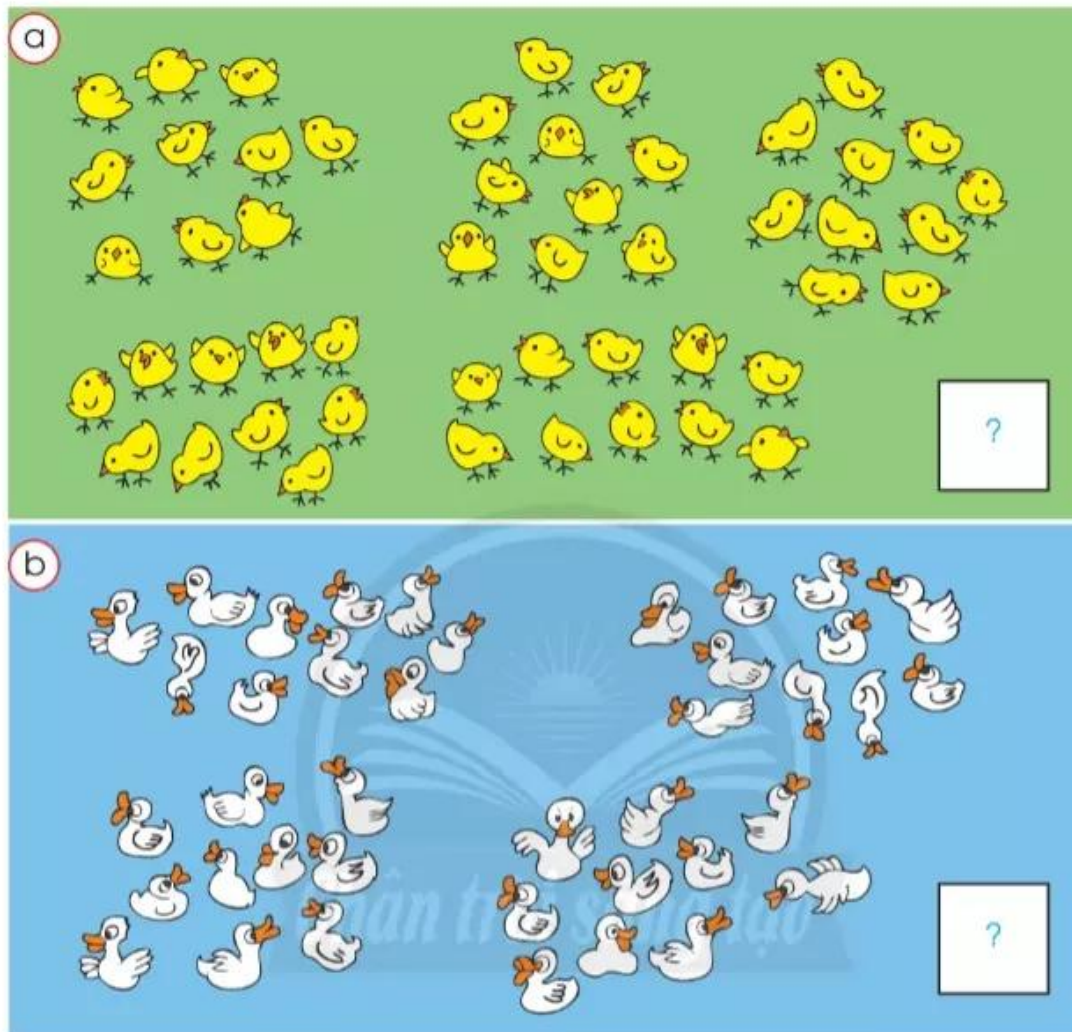
9 stacks of blocks arranged in two rows. The top row has 6 stacks and the bottom row has 3 stacks. Each stack is a pyramid of 10 blocks. The colors of the blocks alternate between pink and green in a repeating pattern. To the right of the stacks is a square box containing a question mark.

c



8 jars of beads arranged in two rows. The top row has 5 jars and the bottom row has 3 jars. Each jar contains 10 colorful beads. To the right of the jars is a square box containing a question mark.

2 Số?



3 Số tròn chục?

