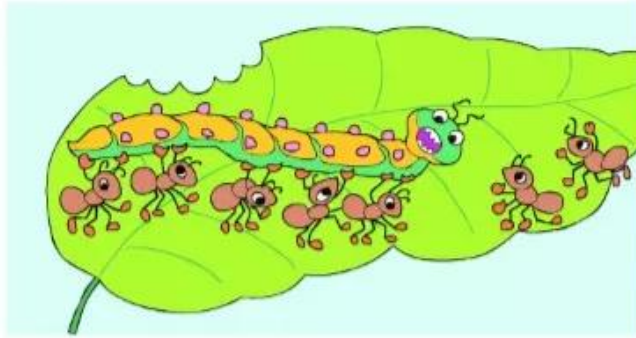
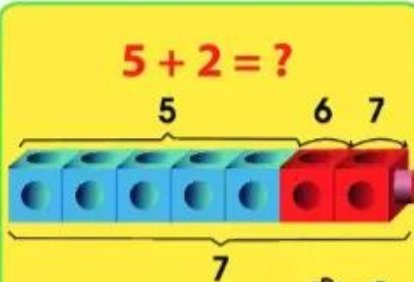


# Cộng bằng cách đếm thêm




$5 + 2 = ?$

5      6    7



7

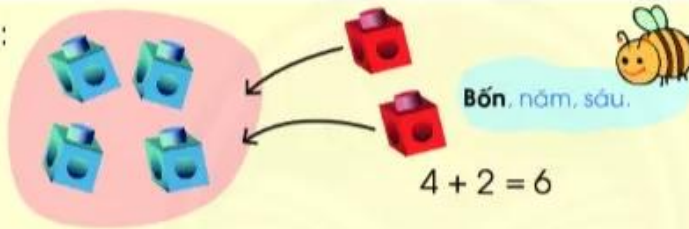
Năm, sáu, bảy.




$5 + 2 = 7$

1 Làm theo mẫu.

Mẫu:



Bốn, năm, sáu.



$4 + 2 = 6$


$5 + 2$

$3 + 3$


$6 + 4$

2 Tính:

a  $8 + 2$



b  $6 + 3$



1 Tính:

$3 + 1$

$4 + 3$

$4 + 6$

$3 + 5$

$6 + 3$

$2 + 8$

$1 + 6$

$5 + 4$

$3 + 7$

$3 + 3$

$4 + 1$

$2 + 6$

2 Tính theo mẫu.

Mẫu:  $3 + 2 + 1 = ?$



Ba công hai bằng năm.  
Năm cộng một bằng sáu.

$3 + 2 + 1 = 6$

$8 + 1 + 1$

$6 + 1 + 2$

$4 + 3 + 2$

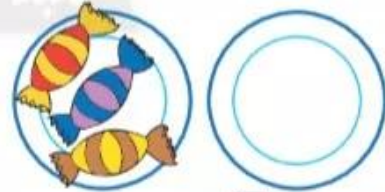
$2 + 6 + 1$

3 

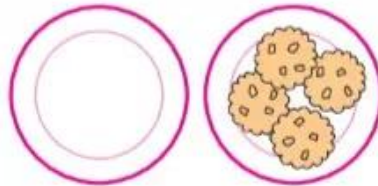
a



$3 + 1 = \boxed{?}$



$3 + 0 = \boxed{?}$



$0 + 4 = \boxed{?}$

b  $1 + 0 = \boxed{?}$

$0 + 3 = \boxed{?}$

$0 + 0 = \boxed{?}$