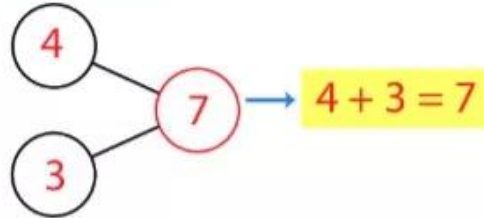


Phép cộng trong phạm vi 10

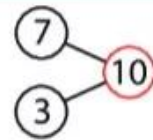


$4 + 3 = ?$



Làm theo mẫu.

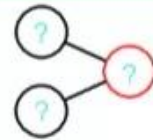

Mẫu: $7 + 3 = ?$



$7 + 3 = 10$

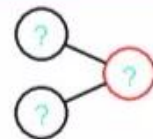
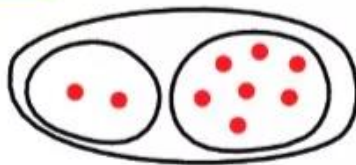
1

$4 + 4 = ?$



2

$2 + 7 = ?$



1 Số, phép cộng?

a

5

4 và 1

3 và ?

$4 + 1 = 5$
 $1 + 4 = 5$

.....?
.....?
.....

b

6

5 và ?

4 và ?

3 và ?

.....?
.....?

.....?
.....?

.....?
.....

2 Tính:

$1 + 1$
 $2 + 2$

$2 + 1$
 $1 + 2$

$3 + 1$
 $1 + 3$

3 Tính:

$3 + 3$
 $2 + 3$

$1 + 4$
 $1 + 5$

$2 + 4$
 $4 + 2$

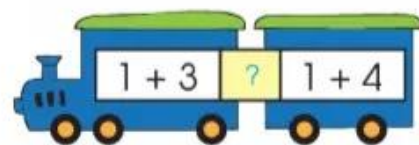
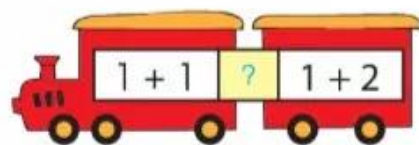
4

>

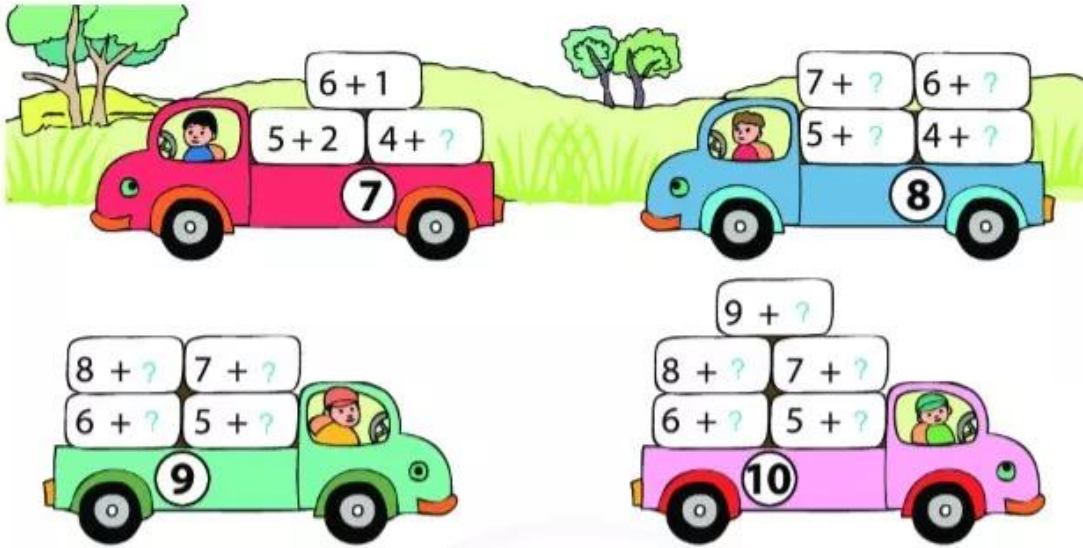
=

<

?



5 Làm theo mẫu.



6 Tính:

$1+8$

$2+6$

$3+6$

$4+4$

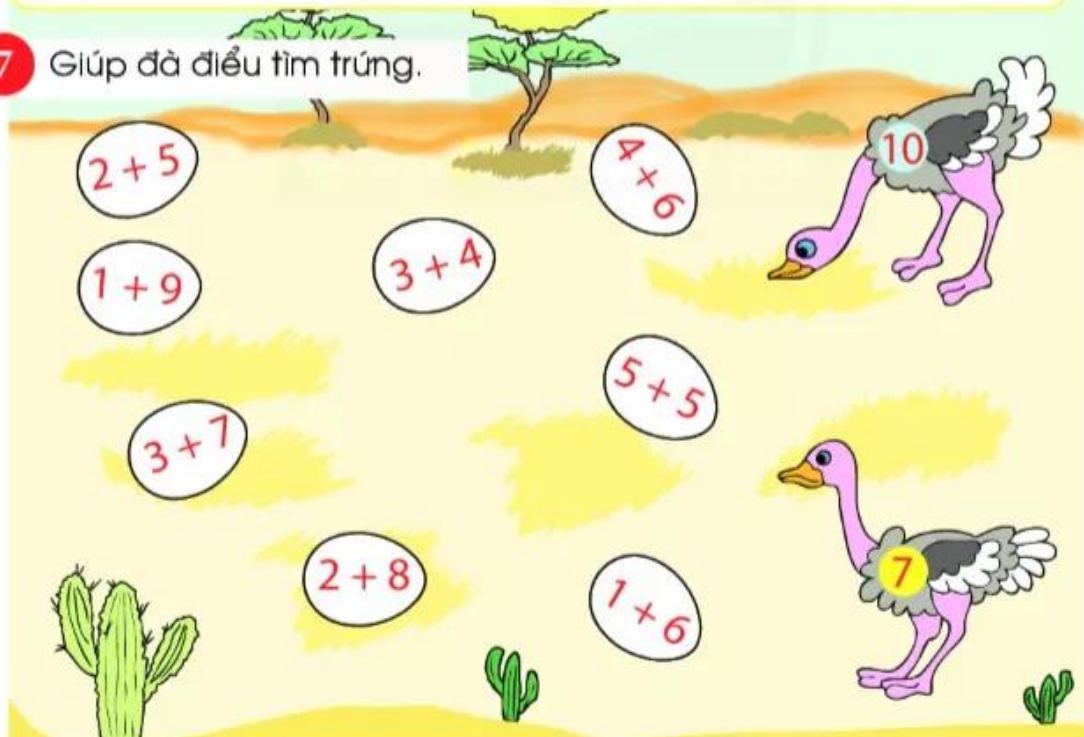
$1+7$

$2+7$

$3+5$

$4+5$

7 Giúp đà điều tìm trứng.



8 Xem tranh và viết hai phép cộng trong phạm vi 10.

