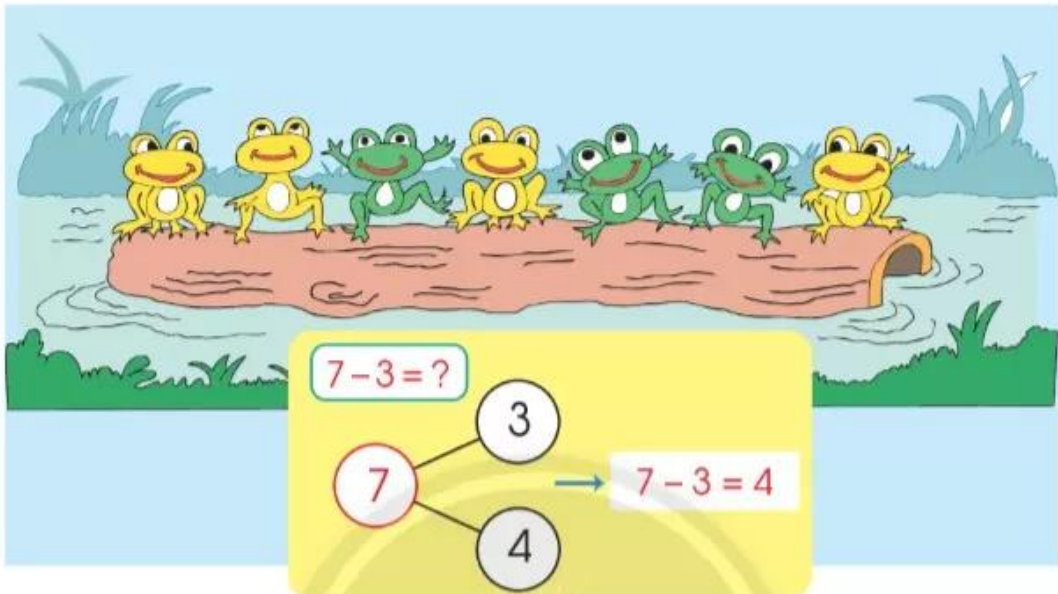
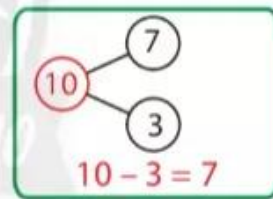
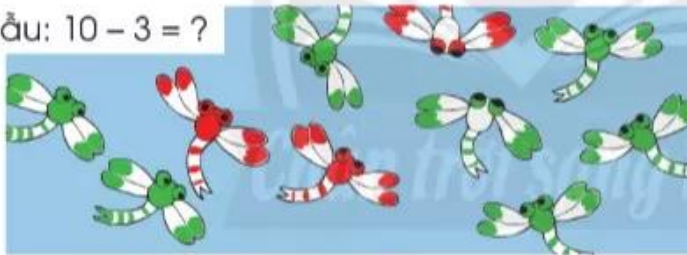


Phép trừ trong phạm vi 10

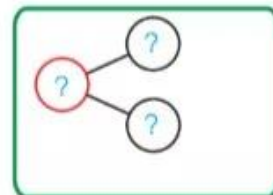


Làm theo mẫu.

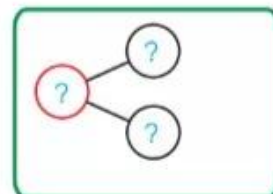
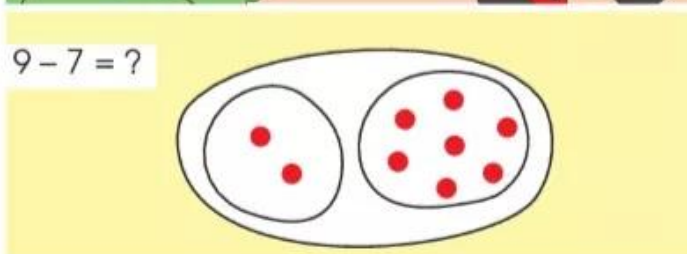
Mẫu: $10 - 3 = ?$



1 $8 - 4 = ?$



2 $9 - 7 = ?$



1 Số, phép trừ?

a

5

4 và ? $5 - 1 = 4$
 $5 - 4 = 1$

3 và ? ?
?

b

6

5 và ? ?
?

4 và ? ?
?

3 và ? ?

2 Tính:

$2 - 1$	$3 - 2$	$4 - 1$
$3 - 1$	$4 - 2$	$4 - 3$

3 Tính:

$5 - 2$	$5 - 3$	$6 - 1$
$5 - 4$	$6 - 3$	$6 - 5$

4

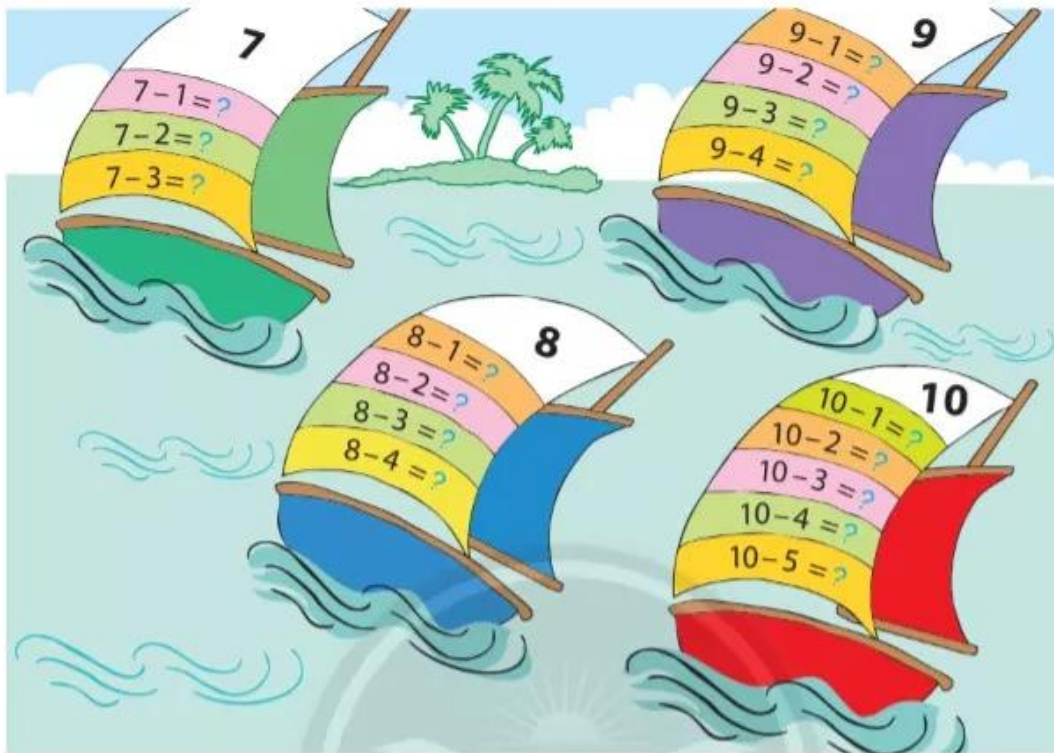
>

=

<

?

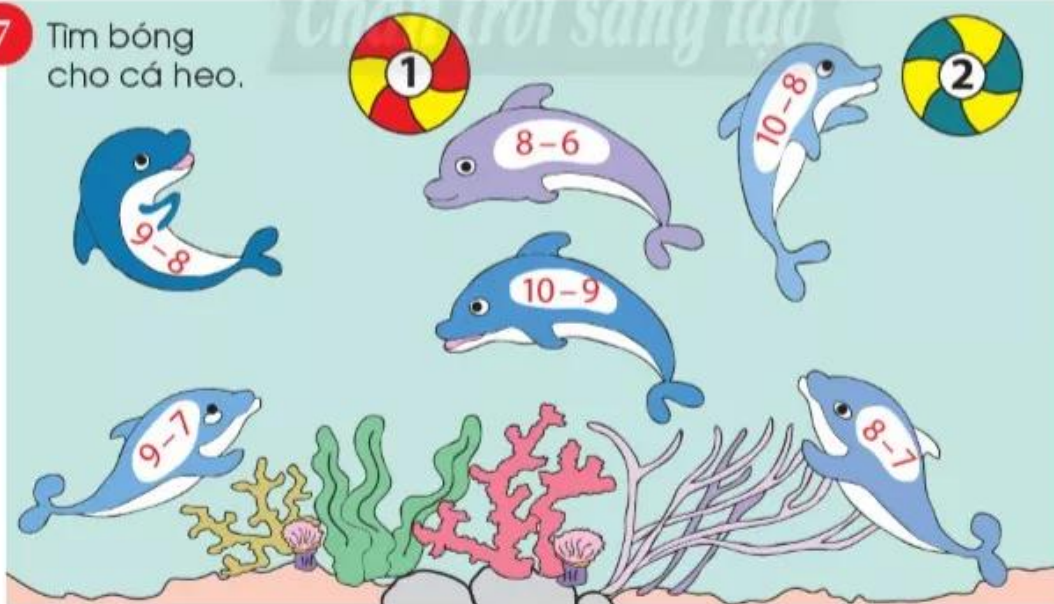
5 Số?



6 Tính:

$7 - 4$	$10 - 6$	$9 - 6$	$7 - 6$
$9 - 5$	$7 - 5$	$10 - 7$	$8 - 5$

7 Tìm bóng cho cá heo.



8 Xem tranh và viết hai phép trừ thích hợp.

