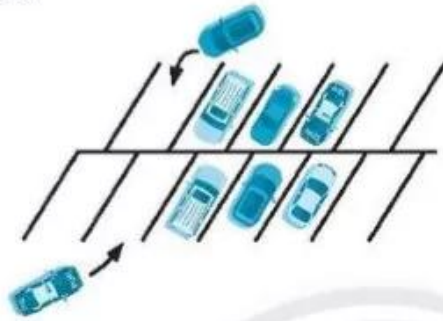




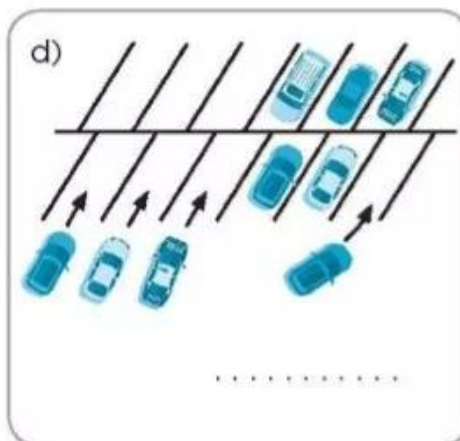
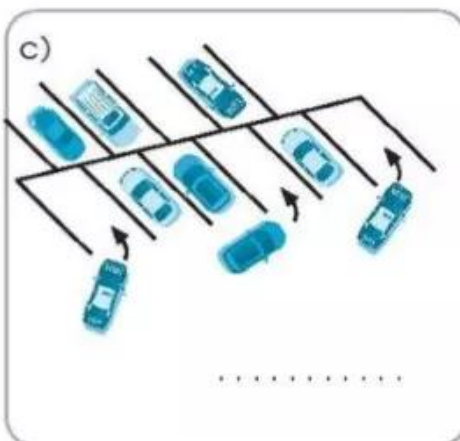
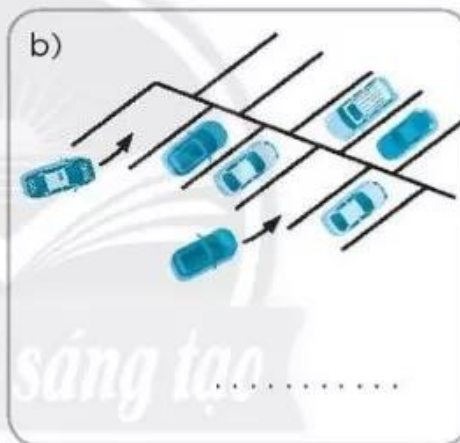
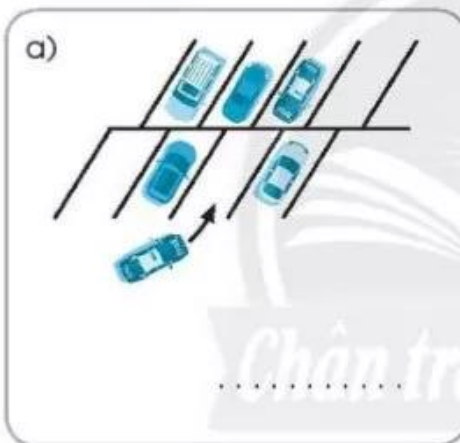
## CỘNG BẰNG CÁCH ĐẾM THÊM

1 Viết phép cộng (theo mẫu).

Mẫu:



$$6 + 2 = 8$$

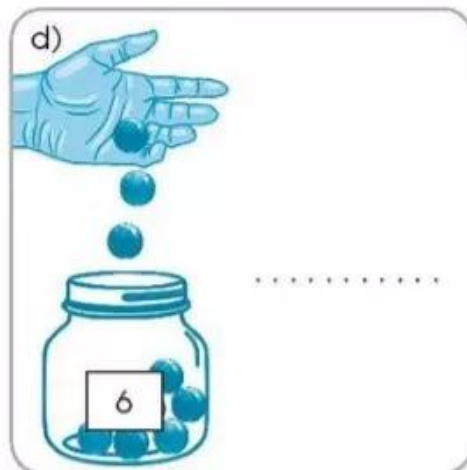
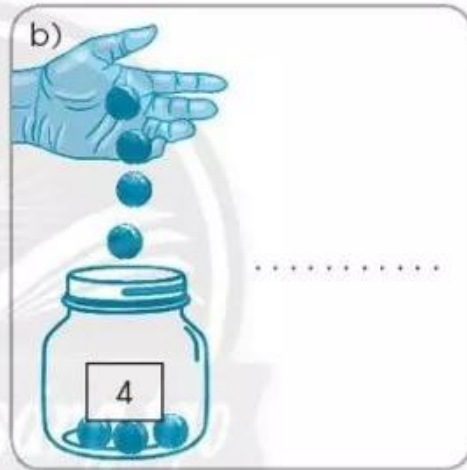


2 Nói và viết phép tính theo mẫu.

Mẫu:

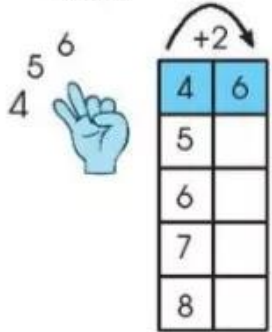
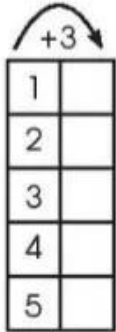
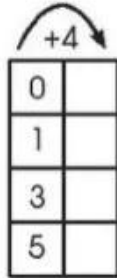
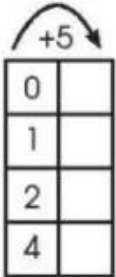


năm, sáu, bảy, tám  
 $5 + 3 = 8$



3 Cộng bằng cách đếm thêm ngón tay (theo mẫu).

Mẫu:

4 Tính.

$8 + 1 = \dots$

$2 + 7 = \dots$

$7 + 3 = \dots$

$1 + 8 = \dots$

$3 + 5 = \dots$

$2 + 5 = \dots$

$6 + 1 = \dots$

$2 + 6 = \dots$

$7 + 1 = \dots$

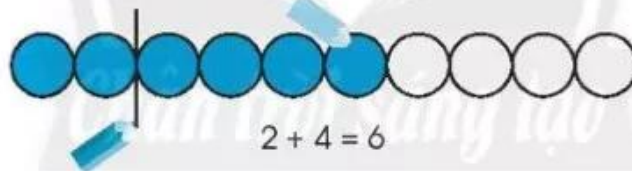
$1 + 6 = \dots$


$1 + 4 = \dots$


$2 + 8 = \dots$

5 Làm theo mẫu.

Mẫu:

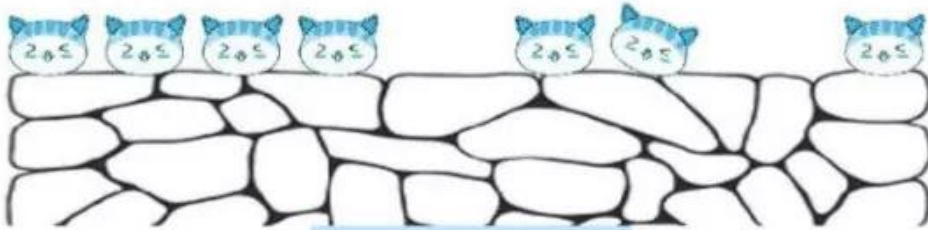


a)   
 $3 + 2 = \dots$

b)   
 $4 + 5 = \dots$

6 Viết phép tính (theo mẫu).

Mẫu:



$$4 + 2 + 1 = 7$$

a)



$$\dots\dots\dots$$

b)



$$\dots\dots\dots$$

c)



$$\dots\dots\dots$$

7 Tính.

$3 + 6 + 1 = \dots$

$1 + 1 + 3 = \dots$


$1 + 2 + 7 = \dots$


$1 + 9 + 0 = \dots$

$4 + 1 + 5 = \dots$

$3 + 1 + 5 = \dots$

8 SỐ?

5	+	4	=	
+				=
=			+	
9	=		+	4

7	+	0	=	
+				=
=			+	
7	=	7	+	

9 Vẽ hình thể hiện phép tính (theo mẫu).

Mẫu:

$3 + 2 + 1 = 6$

$4 + 3 + 2 = \dots$

