



## PHÉP CỘNG TRONG PHẠM VI 10

1 Làm theo mẫu.

Mẫu:

A ten frame with 5 dots in the left column and 1 dot in the right column. Below it, a number bond with 5 and 1 on the left and 6 on the right. Below the number bond are the equations  $5 + 1 = 6$  and  $1 + 5 = 6$ .

a)

A ten frame with 4 dots in the left column and 2 dots in the right column. Below it, a number bond with two empty circles on the left and one empty circle on the right. Below the number bond are two rows of dots for writing.

A ten frame with 3 dots in the left column and 3 dots in the right column. Below it, a number bond with two empty circles on the left and one empty circle on the right. Below the number bond are two rows of dots for writing.

b)

Two empty ten frames. Below them, a number bond with 6 and one empty circle on the left, and 7 on the right. Below the number bond are two rows of dots for writing.

Two empty ten frames. Below them, a number bond with 5 and one empty circle on the left, and 7 on the right. Below the number bond are two rows of dots for writing.

Two empty ten frames. Below them, a number bond with 4 and one empty circle on the left, and 7 on the right. Below the number bond are two rows of dots for writing.

2 Vẽ hình thể hiện phép tính (theo mẫu).

Mẫu:

A rounded rectangle containing the equation  $3 + 2 = 5$  and five empty circles below it.

A rounded rectangle containing the equation  $4 + 3 = \dots$ .

3 Làm theo mẫu.

a) Mẫu:

7 + 1 = 8  
1 + 7 = 8

6 + 2 = 8  
.....  
.....

5 + 3 = 8  
.....  
.....

4 + 4 = 8  
.....  
.....

b) Mẫu:

8 + 1 = 9  
1 + 8 = 9

7 + 2 = 9  
2 + 7 = 9

6 + 3 = 9  
3 + 6 = 9

5 + 4 = 9  
4 + 5 = 9

4 Làm theo mẫu.

Mẫu:

9 + 1 = 10  
1 + 9 = 10

.....  
.....

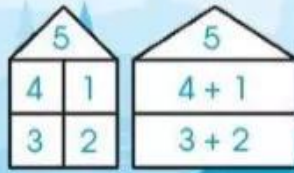
.....  
.....

.....  
.....

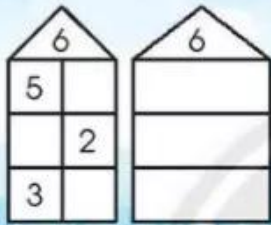
.....  
.....

5 Làm theo mẫu.

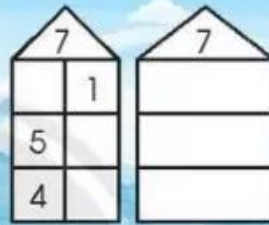
Mẫu:



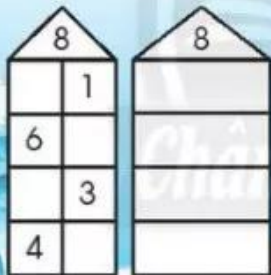
a)



b)



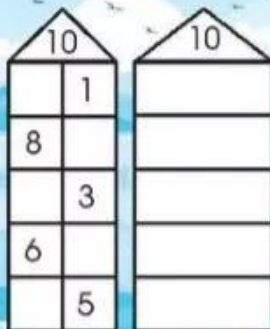
c)



d)



e)



6 Tính.

$6 + 3 = \dots$

$3 + 7 = \dots$

$1 + 7 = \dots$

$5 + 4 = \dots$

$4 + 6 = \dots$

$4 + 3 = \dots$

7 Số?

$3 = 1 + \dots$

$10 = 7 + \dots$


$6 = 2 + \dots$

$9 = 3 + \dots$

$8 = 1 + \dots$

$7 = 3 + \dots$

8 Nối (theo mẫu).



9 Số?

$$\square + 1 = 4$$

$$5 + \square = 10$$

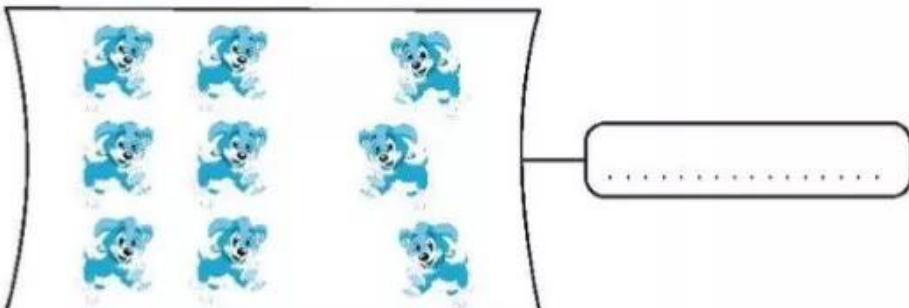


$$\square + 7 = 7$$

$$1 + \square = 10$$

$$\square + 3 = 8$$

$$4 + 5 = \square + 4$$

10 Viết phép cộng thích hợp.



11 Đúng ghi đ, sai ghi s.

a)  $1 + 3 > 3$

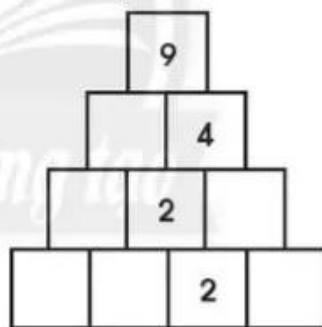
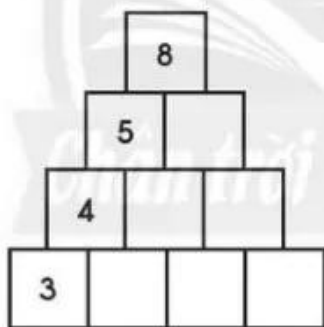
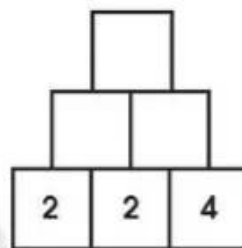
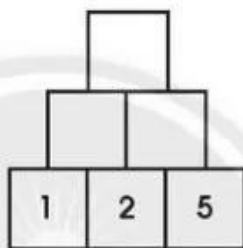
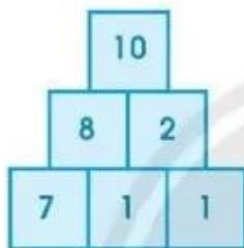
b)  $9 + 1 = 8$

c)  $6 + 4 = 4 + 6$

d)  $10 + 0 > 10$

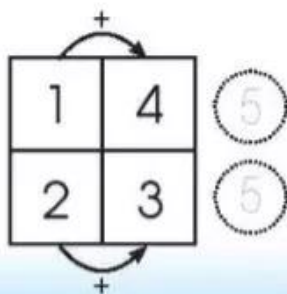
12 Viết số theo mẫu.

Mẫu:



13 Quan sát và làm theo mẫu.

Mẫu: Viết số 1, 2, 3, 4.



Viết số 2, 3, 4, 5.

