



## PHÉP TRỪ TRONG PHẠM VI 10

1 Làm theo mẫu.

5		5	
4	1	$5 - 4 = 1$	
3	2	$5 - 3 = 2$	

a)

6		6	
5			
	2		
3			

b)

7		7	
6			
	2		
4			

c)

8		8	
	1		
6			
	3		
4			

d)

9		9	
8			
	2		
6			
	4		

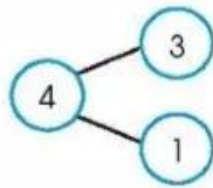
e)

10		10	
	1		
8			
	3		
6			
	5		

2 Tính.

$6 - 4 = \dots$	$8 - 1 = \dots$	$4 - 2 = \dots$
$9 - 7 = \dots$	$7 - 3 = \dots$	$10 - 8 = \dots$
$10 - 6 = \dots$	$6 - 5 = \dots$	$9 - 5 = \dots$

3 Làm theo mẫu.

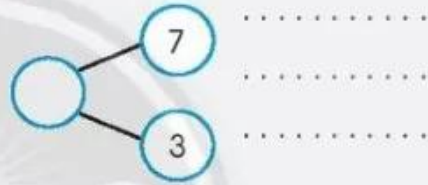


$3 + 1 = 4$   
 $1 + 3 = 4$   
 $4 - 3 = 1$   
 $4 - 1 = 3$

a)



b)



c)



d)



4 Nối (theo mẫu).

5 Xem tranh và viết kết quả phép trừ.

a)



b)



6 Tính.

$$6 + 0 = \dots$$

$$6 - 6 = \dots$$

$$0 + 10 = \dots$$

$$0 + 6 = \dots$$

$$6 - 0 = \dots$$

$$10 - 10 = \dots$$

7



?

$$7 + 2 \dots 7 + 1$$

$$9 + 0 \dots 9 - 0$$

$$2 + 8 \dots 8 + 2$$

$$8 - 1 \dots 8 - 0$$

8 Viết số và phép tính (theo mẫu).

Mẫu:

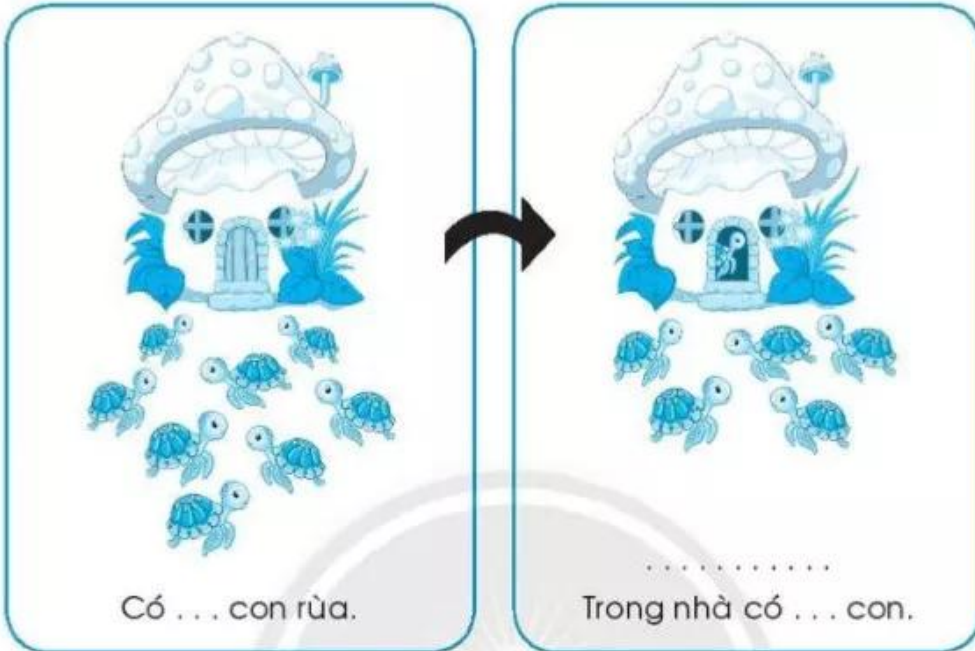
The illustration shows a house with a chimney and a door. In the first panel, there are 5 blue stars with faces outside the house. In the second panel, after an arrow, there are 2 blue stars outside and 3 blue stars inside the house. Below the second panel is the equation  $5 - 2 = 3$  and the text "Trong nhà có 3 con."

a)

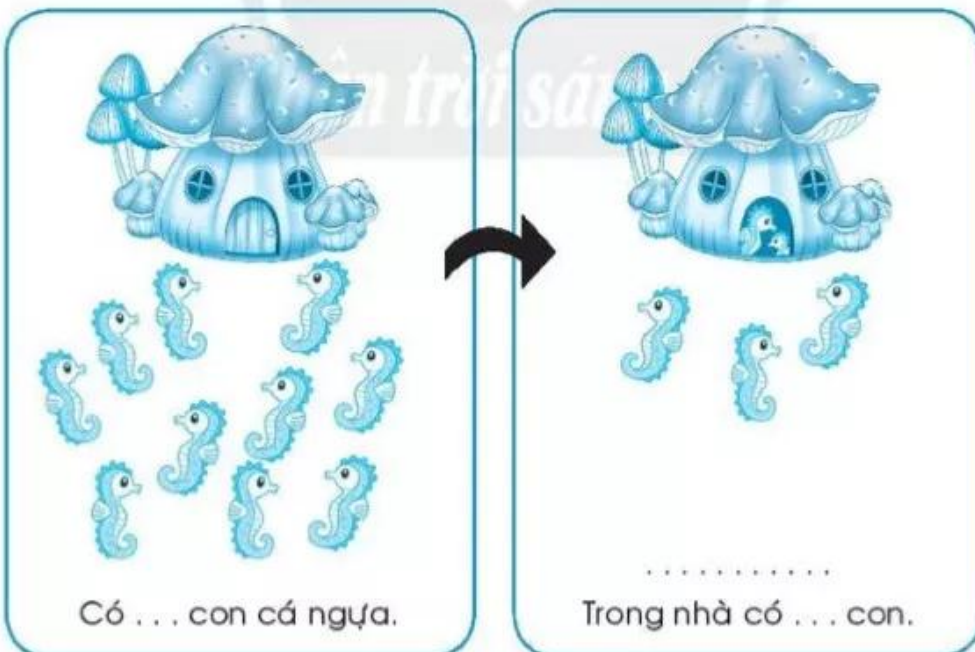
The illustration shows a house with a chimney and a door. In the first panel, there are 8 blue fish with stripes outside the house. In the second panel, after an arrow, there is 1 blue fish inside the house and 7 blue fish outside. Below the second panel is a blank equation  $\dots - \dots = \dots$  and the text "Trong nhà có ... con."



b)



c)



9 Số?

$$8 + \square = 10$$

$$10 - \square = 8$$

$$6 + 4 = \square + 6$$

$$2 + \square = 10$$

$$10 - \square = 2$$

$$\square + 9 = 9 + 1$$

10 Nối (theo mẫu).

$$3 - 1 > \square$$

$$5 - \square = 0$$



$$3 + \square < 5$$

11 a) Số?



$$7 - \square - \square = 2$$

b) Tính.

$$8 - 3 - 1 = \dots$$

$$2 + 1 - 2 = \dots$$

$$10 - 2 - 2 = \dots$$

$$9 - 6 + 1 = \dots$$