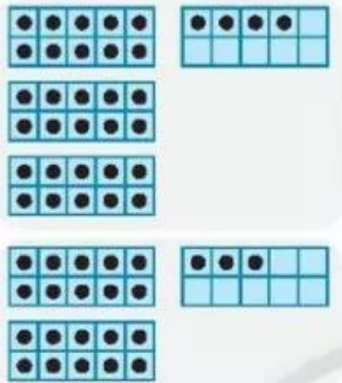




## CÁC PHÉP TÍNH DẠNG $34 + 23, 57 - 23$


1 Tính.



$$4 + 3 = \dots$$

$$30 + 20 = \dots$$

$$\begin{array}{r} 34 \\ + 23 \\ \hline \end{array}$$



$$7 - 3 = \dots$$

$$50 - 20 = \dots$$

$$\begin{array}{r} 57 \\ - 23 \\ \hline \end{array}$$

2 Tính.

$$\begin{array}{r} 46 \\ + 12 \\ \hline \end{array}$$

...

$$\begin{array}{r} 72 \\ + 25 \\ \hline \end{array}$$

...

$$\begin{array}{r} 61 \\ + 8 \\ \hline \end{array}$$

...

$$\begin{array}{r} 96 \\ - 34 \\ \hline \end{array}$$

...

$$\begin{array}{r} 79 \\ - 20 \\ \hline \end{array}$$

...

$$\begin{array}{r} 57 \\ - 4 \\ \hline \end{array}$$

...


3 Đặt tính rồi tính.

$32 + 57$





$87 - 16$

$98 - 6$

$53 + 6$



4 Tính bằng cách đếm thêm, đếm bớt.

$34 + 23 = ?$	$57 - 23 = ?$
<p>Bước 1</p> <p><math>34 + 20</math></p> <p>54 44 34</p> 	<p>Bước 1</p> <p><math>57 - 3</math></p> <p>54 55 56 57</p> 
<p>Bước 2</p> <p><math>54 + 3</math></p> <p>57 56 55 54</p> 	<p>Bước 2</p> <p><math>54 - 20</math></p> <p>34 44 54</p> 
$34 + 23 = 57$	$57 - 23 = 34$

- |                      |                     |
|----------------------|---------------------|
| a) $76 + 20 = \dots$ | b) $84 - 3 = \dots$ |
| $42 + 30 = \dots$    | $29 - 5 = \dots$    |
| $59 + 40 = \dots$    | $65 - 4 = \dots$    |
| $25 + 12 = \dots$    | $96 - 31 = \dots$   |
| $46 + 23 = \dots$    | $77 - 42 = \dots$   |

- c)  $23 - 3 + 7 = \dots$   
 $35 + 12 - 6 = \dots$   
 $87 - 50 - 37 = \dots$

5



?

$58 - 2 \dots 58 - 1 \dots 58 - 0$

6 Đúng ghi  đ, sai ghi  s.

$$\begin{array}{r} 25 \\ + 13 \\ \hline 38 \end{array} \quad \square$$

$$\begin{array}{r} 74 \\ + 2 \\ \hline 94 \end{array} \quad \square$$

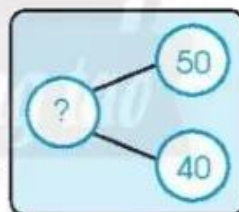
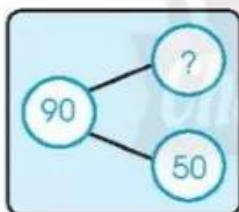
$$\begin{array}{r} 36 \\ - 3 \\ \hline 39 \end{array} \quad \square$$

$$\begin{array}{r} 47 \\ - 5 \\ \hline 42 \end{array} \quad \square$$

7 Viết số vào ô trống.

36	+	12	=	
+		+		-
23	-		=	
=		=		=
	-	23	=	

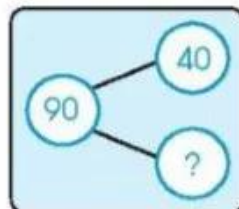
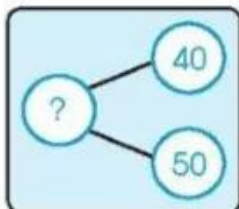
8 Nối sơ đồ với phép tính (theo mẫu).



$40 + 50 = 90$

$90 - 50 = 40$

$90 - 40 = 50$



9

a) Tính.

b) Tô màu theo kết quả

Lớn hơn 50: đỏ

Bằng 50: vàng

Bé hơn 50: xanh

